

09

Class
6th

Sample Questions

Colouring

Make this landscape colourful with your imagination. You may add more objects into this picture



MATHS



Solve the calculations and find your answer in the given grid.

42×24

26×28

52×34

12×44

36×34

28×39

38×32

35×43

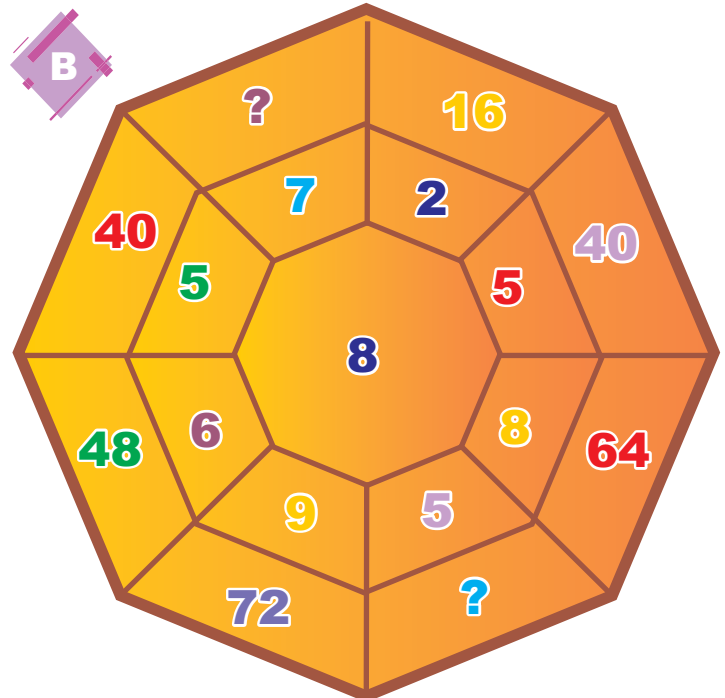
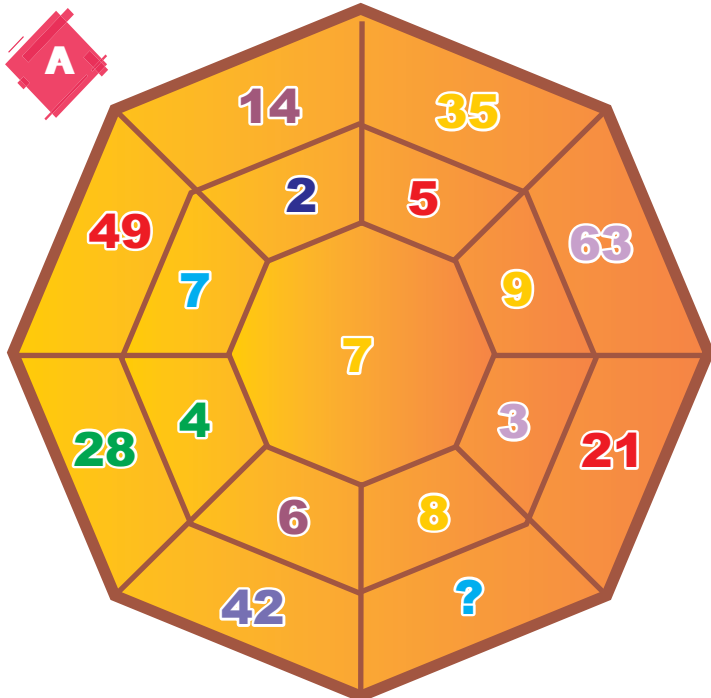
48×38

43×21

5	2	8	6	5	1	0	9	2
2	5	8	1	1	1	2	5	7
7	6	0	7	5	6	8	1	8
2	3	1	4	0	0	8	7	1
8	2	2	0	5	4	5	6	2
5	3	1	3	8	1	1	8	6
9	5	6	9	5	8	0	5	9
4	6	8	2	3	2	0	6	0
0	1	2	2	4	4	8	9	3



Fill in the empty boxes carefully to complete the chart



ENGLISH

Use appropriate conjunction to fill in the blanks.



01

I will either wear a dress _____ a frock on my birthday.

and

but

because

or



02

Frog can hop, _____ they cannot fly.

and

but

because

or



03

Raman has a fever _____ a terrible headache.

and

since

because

or



04

In Summer we wear thin clothes _____ the weather is hot.

so

but

because

and

Complete the sentences by using correct action verbs.

Bought

Jumped

Skipped

struck

hit

laughed



The horse _____ across the river.



The lightning _____ the tree.



Raghav _____ at his joke.



He _____ a home run at the last game.



They _____ a new house.



Rohan _____ the ball at last moment.

Write the name of these different dance forms



Look at the pictures and write the name of states where they are traditionally prepared



SCIENCE

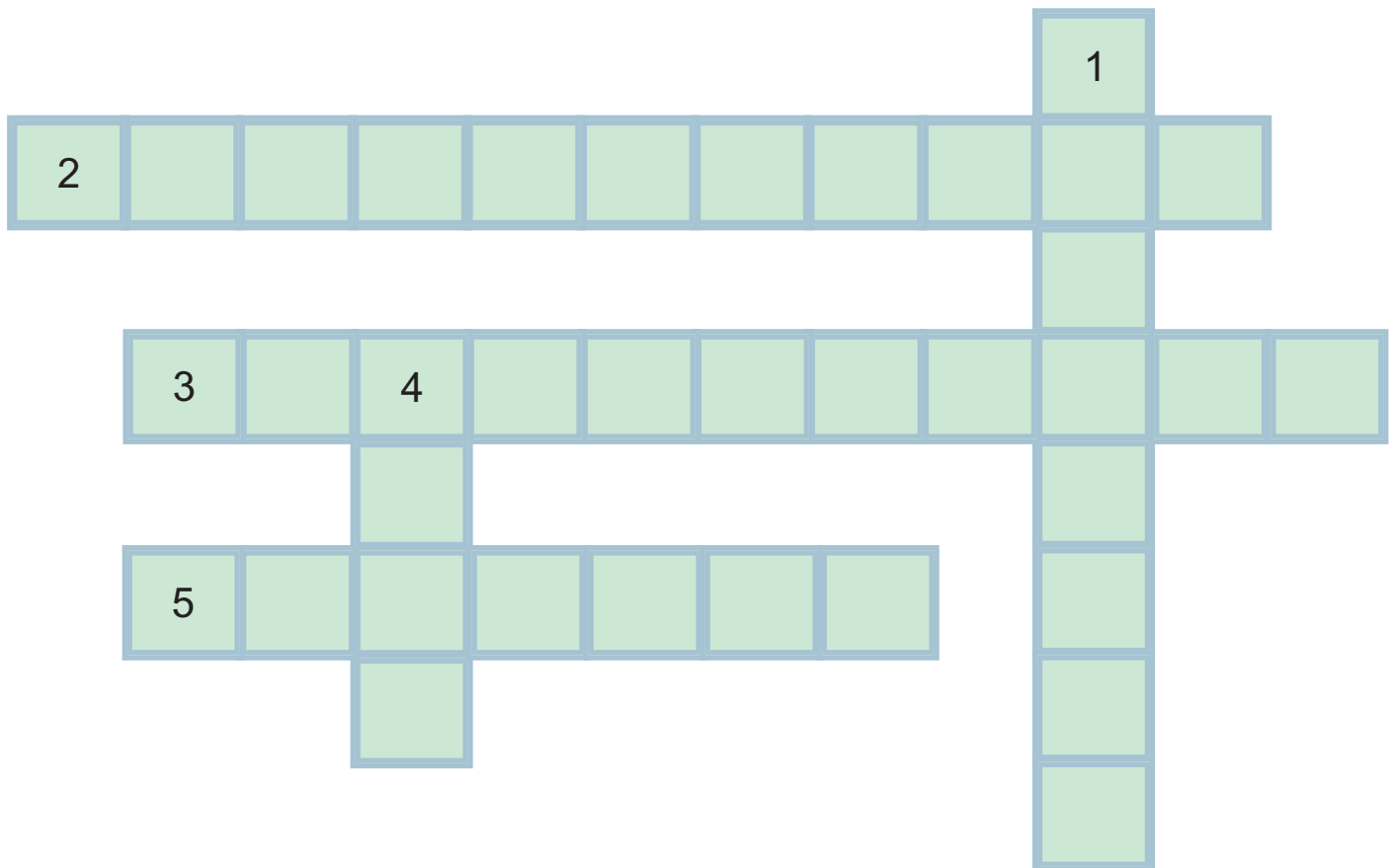
Complete the crossword puzzle:

Across

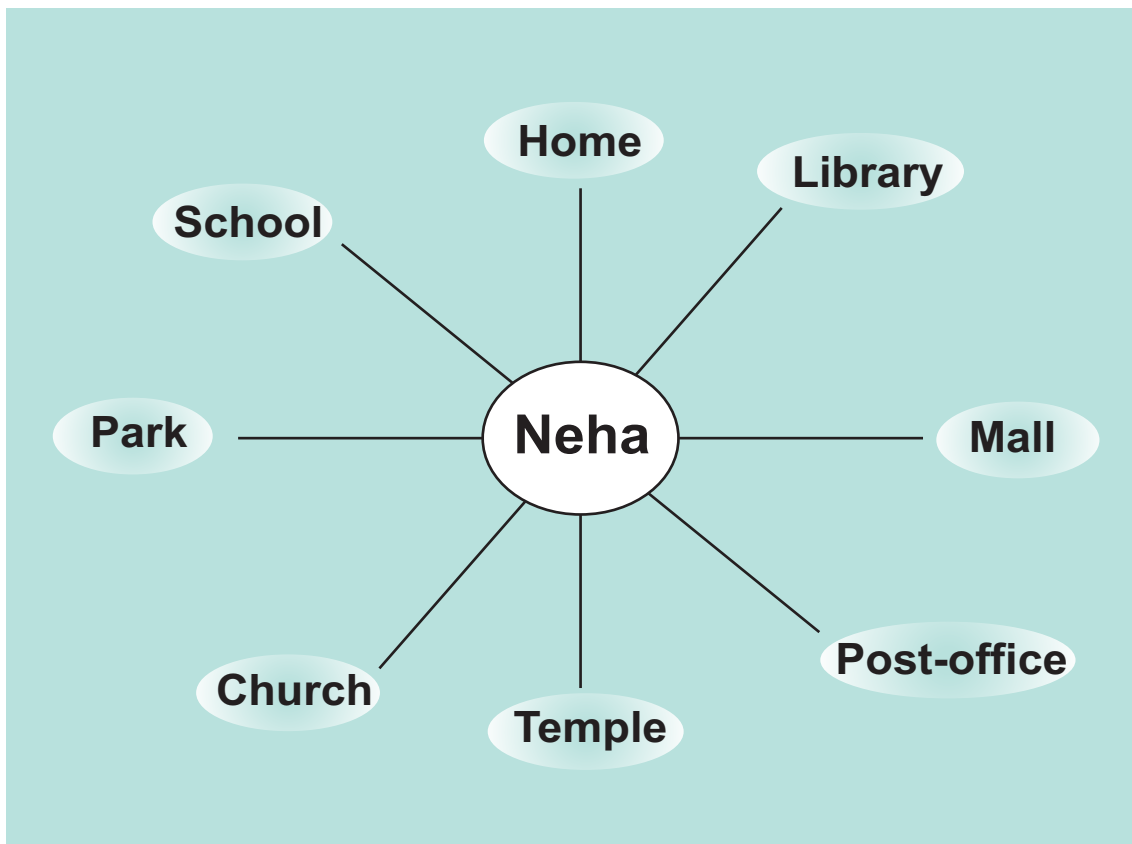
2. An opening on the upper side of a wall, that allows the circulation of air and light for circulation of air and light.
3. It is good to keep mosquitoes and flies away.
5. The pipe that takes the smoke out of a house

Down

1. The system that carries out dirty water away
4. Something other than heat and cold that makes us shiver and wet but a good house that protects us from heat, cold and











Answer the questions based on the direction and places given in the figure:



1. Neha is facing home. She will be facing _____ if she makes a $\frac{1}{4}$ turn to her right.
☐ School ☐ Library ☐ Temple ☐ Mall
2. Neha is facing park. She will be facing _____ if she makes a $\frac{1}{2}$ turn to her left.
☐ School ☐ Mall ☐ Temple ☐ Library
3. Neha is facing temple. What will she be facing if she makes a $\frac{3}{4}$ turn to her left?
☐ Park ☐ Mall ☐ Temple ☐ Library
4. Neha is facing the school. What will she be facing if she makes a $\frac{1}{4}$ turn to her left?
☐ Park ☐ Church ☐ Mall ☐ Post-office
5. Neha is facing the mall. What will she be facing if she makes a $\frac{3}{4}$ turn to her right?
☐ Home ☐ Post-office ☐ Library ☐ Temple

Computer

Complete the table:

1.	Speakers		
2.	Mouse		Input Device
3.			Brain of Computer
4.	Monitor		
5.	Printer		Output Device
6.			Portable Storage Device
7.	Scanner		
8.			Storage Device